

Newsletter

Riverside Primary School & Nursery
St Edmund's Way
Rainham,
Kent ME8 8ET



Happy, Helpful, Hard-working

Friday 3rd December 2021

Term 2 2021/22

Dear Parents/Carers,

This week the Christmas festivities have really started at Riverside. On Thursday, Owls and Kestrels class visited Rochester Cathedral to sing carols and share a reading. They demonstrated fantastic 'Riverside Attitude' and enjoyed their trip.



Thank you to FORPS for all their hard work organising the Christmas Fayre today and for arranging a visit from Father Christmas. As you can appreciate, all of this is no small task and we are very fortunate to have such a dedicated and pro-active team. We are sure everyone has enjoyed seeing and buying what the children have been making to sell at the fayre.

Our Key Stage One children are busy rehearsing for their Christmas play next week. Please make sure you book your tickets, as the songs sound wonderful already.

A reminder that next Friday is Christmas Jumper day. The children can wear a Christmas jumper with their normal uniform if they wish and we ask for a £1 voluntary donation towards Save the Children.

In other news, this week Miss Smallman announced that Riverside will be setting up an Eco-committee. It has been fantastic seeing the wonderful response already and we are looking forward to starting this in the new year. If you would like to be part of this group, applications are due in by next Wednesday.



Thank you once again for your continued support with the change in government guidance around face masks. We now ask that these are worn in all communal areas of the school and will be asking them to be worn to all of the performances, unless you are exempt.

Have a wonderful weekend and we hope you enjoyed our Christmas Fayre.

Yours sincerely,

Kim Wilmer
Headteacher

*This School is committed to safeguarding and promoting the welfare of children,
achieving equal opportunities and combating discrimination.*



Mathematics
Mastery



Rainham Mark
Education Trust



This week we are celebrating....

Frøya - Seals

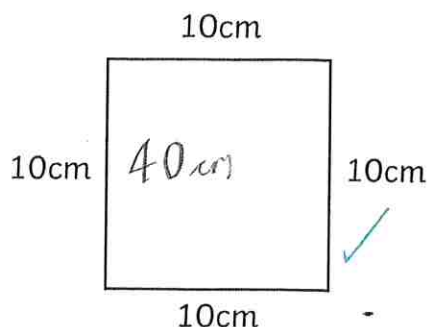
VALT

2/12/21

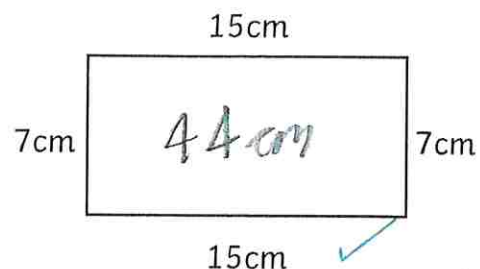
Calculate the perimeter of 2D shapes.

Calculate the perimeter of each of these shapes. Write the answer inside the shape. Always check the units of measure and remember that these drawings are not to scale!

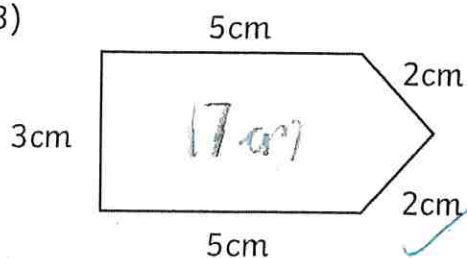
1)



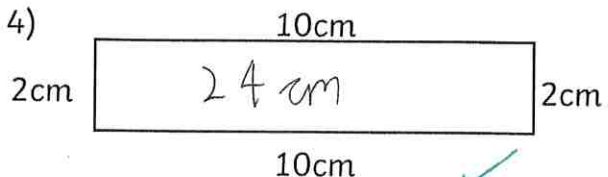
2)



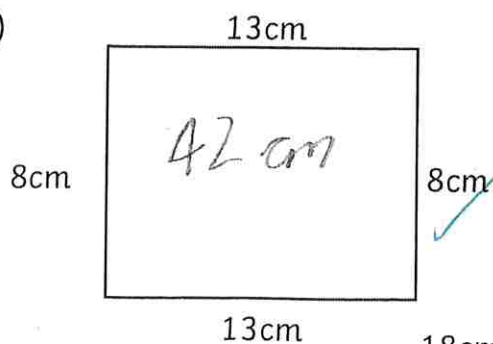
3)



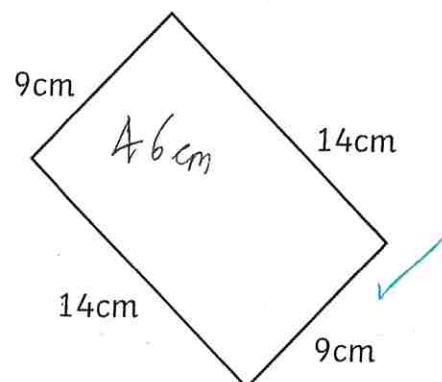
4)




5)



6)



7)



Brilliant understanding
of perimeter.